

Monika's Nursing Academy Hamirpur


"Innovation is our Tradition"

AIIMS Delhi Nursing

Officer – 2019

- 1. A nurse is preparing to give bath to admitted patient with perineal problem. Which of the following will help the patient?**
 - A. Bed bath
 - B. Therapeutic bath
 - C. Self-bath with minimal help
 - D. None of the above
- 2. Nurse off from floor and patient fall from bed. This type of injury belong to :-**
 - A. Battery
 - B. Negligence
 - C. Tort
 - D. None
- 3. Patients medical record with essential information is responsibility of ?**
 - A. Patient
 - B. Director
 - C. Treating doctor
 - D. Medical superintendent
- 4. Post-partum women having bleeding from 1st day after delivery is called as ?**
 - A. Primary PPH
 - B. Secondary PPH
 - C. Third stage hemorrhage
 - D. True post-partum hemorrhage
- 5. In which condition distal pulse is preferred rather than apical pulse?**
 - A. Arrhythmia
 - B. Shock
 - C. Hypertension
 - D. Heart block
- 6. A pre-eclampsia women baby is lying with her mother. Neonate born in 37 weeks after 57 hrs. When she monitoring vital signs of baby, temperature is low 35 degree C, what you will do for that?**

- A. Give punishment for mother for not caring baby
 - B. Separate the baby from mother
 - C. Place baby under radiant warmer
 - D. Cover the baby and check the vitas after 30 minutes
- 7. A woman with 3rd day postpartum has complaint of engorgement in both breasts. What is cut off temperature for fever in post-partum woman?**
 - A. 37 degree C
 - B. 38 degree C
 - C. 39 degree C
 - D. 34 degree C
 - 8. Universal blood donor?**
 - A. O
 - B. AB
 - C. A
 - D. B
 - 9. WHO Hand wash time with soap?**
 - A. 40 to 60 seconds
 - B. 20 to 30 seconds
 - C. 2 minutes
 - D. 5 minutes
 - 10. Why it is necessary to remove dark colored nail paint before surgery?**
 - A. Nail paint interfere with SPO2 monitoring and we cannot assess Capillary Refill time (CRT)
 - B. To prevent burns from cautery
 - C. Nail paint increases chances of infections
 - D. To follow OT ethics
 - 11. Patient with MRSA admitted in MICU, the nurse has to provide colostomy care to patient. Which PPR should the nurse use?**
 - A. Gloves, Gown, Mask
 - B. Gloves only
 - C. Gloves & mask
 - D. Gloves shoe cover
 - 12. Which Leopold maneuver is used to assess the fetal attitude during abdominal palpation of an ANC mother?**



Monika's Nursing Academy Hamirpur

"Innovation is our Tradition"

- A. First
B. Second
C. Third
D. Fourth
- 13. Self-care deficit theory proposed by :-**
A. D Orem's
B. Rogers
C. Betty Newman
D. Leininger
- 14. Patient with Anorexia nervosa taking food correctly as per her diet plan, but there was no increase in weight observed. What will be nursing intervention for the above patient?**
A. Observe patient while taking meal and after up to 2 hours
B. Increase calorie of food from 1500 to 2000
C. Add vitamin tablet to her medications
D. Engage them in other activities
- 15. In a 50 over match, the chasing team scored 5 runs per over in the first 30 over. Required run rate is 10 runs per over. What is the score of first team?**
A. 350
B. 349
C. 250
D. 399
- 16. What is the difference in regular ECT and Modified ECT?**
A. Low Volt shock is provided
B. Anesthesia is given
C. Muscle relaxant is given
D. Pain killer is provided
- 17. All are crystalloid solutions except?**
A. Normal saline
B. Ringer lactate
C. 5% Dextrose
D. HES
- 18. An antenatal mother is admitted with complaints of eclampsia. What will be the loading dose of $MgSO_4$ given to patient?**
A. 4 ml in 16 ml NS
B. 8 ml in 12 ml of NS
C. 6 ml in 14 ml of NS
D. 2 ml in 18 ml of NS
- 19. Which among Measures of dispersion?**
A. Mean
B. Range
C. Mode
D. Median
- 20. A patient was brought to ED with complaint of chest pain from 1 hour. Which test is done to detect myocardial infraction?**
A. Serum electrolyte
B. Check ABG
C. Check CBC
D. Troponin T
- 21. Which of the psychiatric drug does not need any test dose before starting routine dose?**
A. Haloperidol
B. Risperidone
C. Clozapine
D. Quitepine
- 22. A patient admitte in a ward with the diagnosis of delirium. In first 24 to 48 hours what nurse plan according to priority.**
A. Orientation to person, place and environment
B. To restore bladder and bowel function
C. Correct the wake and sleep cycle
D. To improve nutritional status
- 23. A patient posted of surgery advised to remove Jewelry because?**
A. To maintain OR ethics
B. It cause burns to patient with use of cautery
C. To prevent theft
D. To prevent disturbance to surgeon
- 24. At what time ward census done?**
A. Day time
B. Morning shift
C. Evening Shift
D. None of the above
- 25. Adrenaline dose in anaphylactic shock is :-**

Monika's Nursing Academy Hamirpur

"Innovation is our Tradition"

- A. 1:1000 (0.5 ml)
B. 1:10000(0.5 ml)
C. 1:1000 (1 ml)
D. 1:10000 (1ml)
- 26. Position for a patients with continuous RT feeding :-**
A. Supine
B. Fowlers
C. Reverse Trendelenburg
D. Side lying
- 27. Normally enteral feedings are flushed with water to open blocked tube and ease feeding. In which area it is done with air?**
A. NICU
B. Operation unit
C. Rehabilitation unit
D. Critical care unit
- 28. 19-year-old unmarried girl came to gynaec OPD for vaccination against cervical cancer. Which vaccine will be administered to the client?**
A. Gardasil
B. TCV
C. Bexsero
D. HBV
- 29. Patient in emergency dept. diagnosed to have fluid and air present in lung. What is the above-mentioned condition known as?**
A. Hemothorax
B. Hydro-pneumothorax
C. Haemo-pneumothorax
D. Pneumothorax
- 30. Lignocaine and adrenaline not used for repair of injury to digitalis because?**
A. Adrenaline causes vasoconstriction of blood vessels supplying digitalis which may lead to decreased tissue perfusion and necrosis
B. Adrenaline decreases the effect of lignocaine
C. Adrenaline causes systemic effect
D. Adrenaline causes vasodilation which may lead to increased bleeding.
- 31. Patient with DVT is advised Low molecular heparin. At which site Nurse will administer this?**
A. SC
B. IM
C. Oral
D. IV
- 32. Glove papers are discarded in which BMW dustbin?**
A. Black dustbin
B. Red dustbin
C. Yellow dustbin
D. Blue dustbin
- 33. BMW management of vial and broken ampule discarded in**
A. Blue dustbin
B. Red dustbin
C. Black dustbin
D. Blue cardboard box
- 34. Sharp blades and needle to discarded in which of following?**
A. Black cardboard
B. Red
C. White Container
D. Blue
- 35. Vicryl 3-0 is :-**
A. Natural absorbable
B. Synthetic non-absorbable
C. Synthetic absorbable
D. Natural non absorbable
- 36. Doctor prescribed pediatric child as follows, 50 ml fluid transfused over 30 min at drop rate of 15ml per hours. In 30 minutes. What will be the flow rate?**
A. 20
B. 50
C. 25
D. 30
- 37. Nurse asked to give 1000 ml of normal saline at flow rate of 125 ml per hours. How much time it will take to complete this fluid?**
A. 8 hours
B. 6 hours
C. 10 hours



Monika's Nursing Academy Hamirpur

"Innovation is our Tradition"

- D. 12 hours
- 38. Nurse on PICU advised to give 400 ml fluid to be given on 8 hours, drop factor is 60 drop per minute. Nurse will run this fluid at what flow rate?**
- A. 13 drops per minute
B. 50 drops per minute
C. 17 drops per minute
D. 30 drops per minute
- 39. All of the following are correct regarding stoma formation except?**
- A. Stoma is created near the bony prominence
B. Stoma should be created away from bony prominence
C. Stoma is created in lower abdomen in fatty region
D. Stoma can be done anywhere
- 40. ECG of the patient is showing ST depression, prominent U wave and inverted T wave. Which of the electrolyte imbalance present?**
- A. Potassium 2.2 mEq/L
B. Calcium 8.2 mEq/L
C. Magnesium 1.8 mg/dl
D. Sodium 133 mEq/L
- 41. Patient is undergoing blood transfusion and suddenly patient shows complaints of transfusion reaction. What will be the priority nursing intervention?**
- A. Stop the infusion and remove cannula
B. Stop the infusion and flush with NS
C. Complete the transfusion and administer injection avil
D. Complete the transfusion and discard the bag
- 42. Nurse taking care of child who is having epilepsy. What nurse should do immediately**
- A. Airway management and provide side lying position
B. Administer oxygen to child
C. Do nothing and record the epilepsy type and duration
D. Inform doctor about epilepsy type and record in nurse's chart
- 43. What advise should a nurse give to a patient on lithium therapy?**
- A. Drink lot of water
B. Take medicine after meal
C. Take medicine on empty stomach
D. Take high calorie diet
- 44. All of the following are sesamoid bone except?**
- A. Patella
B. Fabella
C. Calcaneum
D. Cyamella
- 45. How frequently will you conduct blood test while patient is on regular clozapine?**
- A. Twice a week
B. Weekly
C. Monthly
D. Fortnight
- 46. If school is connected to teacher in some way then court is connected to :-**
- A. Lawyer
B. Victim
C. Petitioner
D. None
- 47. What is key unit of nation**
- A. Constitution
B. Law
C. People
D. None
- 48. A is sitting in-front of B.D is sitting m behind B. c is sitting behind A. then position of C respect to b**
- A. In front
B. Can't be determined
C. Behind
D. None
- 49. Read given scenario and tell; 1. Man enter park before dog;2.Duck/bird enter the park last. 3. Woman entered after dog but before duct/bird. Who entered before park first?**
- A. Man

Monika's Nursing Academy Hamirpur

"Innovation is our Tradition"

- B. Woman
- C. Dog
- D. Duck/bird

50. What should come at the place of question mark (?) in the following question:- $(1/18) * (2/9) + 3(1/27) * 1.5 = ? \div 34$

- A. 360
- B. 390
- C. 380
- D. 370

51. Injection Morphine is given into the calf during procedure for pain relief after the procedure. After procedure which of following analgesic you will not administer?

- A. Paracetamol
- B. Diclofenac
- C. Tramadol
- D. Fentanyl

52. Three friends in college election go 300,800,900 votes respectively. What percentage of the total votes the winner candidate got?

- A. 45%
- B. 55%
- C. 50%
- D. 60%

53. A train started from source runs at speed of 60 km/hr. How much time will take to reach 2 km from source.

- A. 2 minutes
- B. 3 minutes
- C. 4 minutes
- D. 1 minutes

54. With which of the following sports "Agakhan trophy" is related to?

- A. Field Hockey
- B. Horse Racing
- C. Table Tennis
- D. Show Jumping

55. A man travels 100 km towards south. From there he turns right and travels 100 km and again turns right to travel

50 km. Which direction is he in from his starting point?

- A. North
- B. North east
- C. East
- D. South West

56. Choose the alternative which is closely resembles the mirror image of the given combination.

NONVERBAL REA

a. AERJABREVNON

b. NONVEBVBREA

c. NONVERBAL REA

d. NONERBILREA

57. Railway station is 5 km west to ram's house. Post office is 5 km north to the railway station. What will be position of post office from Ram house?

- A. North west
- B. South west
- C. North east
- D. South east

58. Arrange the following words in logical sequence 1. Crime 2. FIR 3. Bail 4. Court 5. Police.


- A. 1,2,3,5,4
- B. 5,1,3,4,2
- C. 1,2,5,4,3
- D. 4,5,1,2,3

59. Arrange the following words in a meaningful order 1. River 2. Dam 3. Generator 4. Electricity 5. Turbine

- A. 1,2,5,3,4
- B. 1,3,5,4,2
- C. 3,1,5,4,2
- D. 3,1,2,5,4

60. Patient with anorexia nervosa will have:-

- A. Tachycardia, Hypertension, Hypothermia
- B. Bradycardia, Hypotension, Hypothermia
- C. Tachycardia, Hypotension, Hypotermia



Monika's Nursing Academy Hamirpur

"Innovation is our Tradition"

D. Bradycardia, Hypertension,
Hyperthermia

61. Patient is suffering from dyspnoea. Which position will you provide for patient to relieve?

- A. Supine
- B. Prone
- C. Trendelenburg
- D. Fowler's

62. Needle stick injury can result in all of following except?

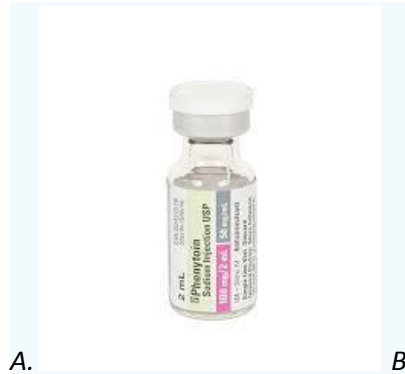
- A. HIV
- B. HBV
- C. HCV
- D. Malaria

63. Nurse on duty find following color autoclave label on instrument set. What may be expected action?

- A. Set is not sterile and other set should be used in surgery
- B. Set is partially sterile
- C. Set is sterile and can be used in surgery
- D. None of the above

64. Which of the following combination is in-compatible ?

- A. Phenytoin + DNS
- B. Amphotericin B + Normal saline
- C. Intralipid 20% + MVI



A.

B.



C.



+ + +

Monika's Nursing Academy Hamirpur

"Innovation is our Tradition"



- A. Otoscope
- B. Tonometer
- C. Ophthalmoscope
- D. None

66. This is solution used in hospitals after how many days, you will change this solution?

- A. 7 days
- B. 28 days
- C. 14 days
- D. 21 days



67. Following the picture of sterile sponge used in emergency. It has a blue color thread. What is the purpose of the blue color thread?

- A. Blue line is radio-opaque
- B. Blue color is easily visible when soiled in blood
- C. No specific purpose
- D. Design of gauze piece



68. A primigravida with o negative blood group delivered a bay with o positive blood group. While DCT was negative. What should be done next?

- A. Repeat DCT
- B. Give 300 mg of anti-D to mother
- C. Give 150 mg of Anti-D to mother
- D. No need to give Anti-d to mother



69. Which of following component not present in normal saline?

- A. Na^+ 154 mEq/L
- B. Cl^- mEq/L
- C. K^+ 52 meq/L
- D. None of the above

- A. A only
- B. A and b
- C. A and c
- D. None of the above

65. Identify following instrument in image

70. Patient is allergic to B-lactamase and which of following drug is safe to administer?

- A. Amoxicillin
- B. Penicillin

Monika's Nursing Academy Hamirpur

"Innovation is our Tradition"

- C. Vancomycin
- D. Cefazoline

71. Patient came to ED with uncontrolled diabetes, urine test showed ketone positive. ABG reports showed pH 6.25, $p\text{CO}_2$ -39, $p\text{O}_2$ -55 and blood glucose is 600 mg/dl. Which of the following condition is present?

- A. Respiratory acidosis
- B. Respiratory alkalosis
- C. Metabolic acidosis
- D. Metabolic alkalosis

72. Which of the following glove is of largest size?

- A. 6.0 glove
- B. 6.5 glove
- C. 7.0 glove
- D. None

73. Nurse has given the following glove to the surgeon. What could be the possible reason?

- A. They are cheap
- B. Because of allergic tendency of surgeon
- C. Just because they are only available
- D. None of the above

74. An antenatal mother came to OPD with Hb-8.5 gm% which of the following is true?

- A. Mild anemia
- B. Moderate anemia
- C. Severe anemia
- D. No anemia

75. Patient has undergone donor nephrectomy. The drug will not be given?

- A. Morphine
- B. Fentanyl
- C. Paracetamol
- D. Diclofenac

76. In an immune compromised patient, the nurse should take infection prevention methods when WBC is :-

- A. 11000
- B. 5800
- C. 7000
- D. 2000

77. Patient came to emergency with alcohol with withdrawal symptoms what symptoms will you observe?

- A. Tremor, sweating, restlessness

- B. Fever, nausea vomiting, hyperactivity
- C. Hypertension, sweating, rhinorrhea
- D. Deep coma, lacrimation, tears

78. Patient came to ED unconscious with pinpoint pupil, lacrimation & history of substance abuse. Which of the drug will be administered?

- A. Flumazenil
- B. Naloxone
- C. Lorazepam
- D. Naltrexone

79. In rehabilitation center, which of the following drug is used as opioid substitute in substance abuse patient?

- A. Buprenorphine
- B. Buprenone
- C. Haloperidol
- D. Quetiapine

80. How will you differentiate clinical depression with normal grief?

- A. Persistent anhedonia in clinical depression
- B. Normal grief, sense of guilt is present in every situation
- C. Often opens up angry
- D. Feels temporary loss of self esteem

81. Which of the following patient is at risk of fluid volume deficit?

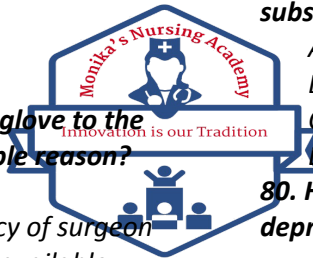
- A. Patient with wound irrigation
- B. Ileostomy
- C. Patient with cardiac disease
- D. None

82. Patient will be positioned as followed for vaginal examinations:-

- A. Prone
- B. Left lateral
- C. Supine
- D. Dorsal recumbent

83. Patient on post-partum period of 72 hours, a purpura developed fever with decreased skin integrity due to fluid loss and excessive vaginal secretions may indicate development of sepsis. In above scenario the body temperature support sepsis is :-

- A. 36 degree C



Monika's Nursing Academy Hamirpur

"Innovation is our Tradition"

- B. 37 degree c
- C. 38 degree c
- D. 40 Degree c

84. Identify blade used

- A. 11
- B. 15
- C. 21
- D. 22

85. Marked area shown in following image is :-

- A. Axillary region
- B. Cubital region
- C. Thoracic region
- D. None of the above

86. Identify instrument shown on following image :-

- A. Laryngoscope
- B. Bronchoscope
- C. Videoscope
- D. Endoscope

87. Identify following tube in image

- A. Nasogastric tube
- B. Orogastric tube
- C. NJ tube
- D. Feeding tube

88. In a group, Average weight of four persons in group is 40 kg. and one person joined the same group and now average weight of 5 persons is 50. What will be the weight of 5th person ?

- A. 90
- B. 80
- C. 70
- D. 60

89. Person A work 20% more than person B. Total works list is 110. Then what is work of B

- A. 50
- B. 40
- C. 35
- D. 30

90. Identify following instrument:-

- A. Monopolar cautery pencil
- B. Bipolar cautery pencil
- C. Electric pencil
- D. None of the above

91. Identify following instrument which used in diagnostic procedures:-

- A. Trucut biopsy needle
- B. Lumbar puncture needle
- C. Punch biopsy
- D. Pleural tapping needle

92. Identify which of following retractor is used in abdominal surgery?

- A. Vaginal surgery
- B. Thoracotomy
- C. Cesarean section
- D. None

93. Identify Procedure done by health care professional in the image below :-

- A. Cerebrospinal fluid
- B. Pleural fluid
- C. Cerebral fluid
- D. Peritoneal fluid

94. Nurse advised to give injection vitamin k for new born bay. The route and dose of vitamin k is :-

- A. Vitamin K 1 mg IM
- B. Vitamin k 1 mg SC
- C. Vitamin k 0.5 ID
- D. Vitamin K 10 mg IV

95. Normal hemoglobin level in adult is :-


- A. 12 to 15 gm %
- B. 12 to 15 Mg%
- C. 10 to 18 gm%
- D. 10 to 18 mg%

96. Identify the following procedure which nurse doing in following image

- A. TPN
- B. Dialysis
- C. Hydration
- D. Lavage solution

97. Identify milky white solution which is widely used in OT for sedation and anesthesia based on following image :-

- A. Propofol
- B. Midazolam
- C. Ketamine
- D. Rocuronium



Monika's Nursing Academy Hamirpur

"Innovation is our Tradition"

98. The nurse is posted in ED and patient comes with seizure. The priority management of seizure patient is :-

- A. Airway management by side lying position and head turn
- B. Controlling seizure with medications
- C. Circulation management with IV fluids
- D. None of the above

99. Identify the red wave forms in following image

- A. IABP
- B. CVP
- C. NIBP
- D. One of the above

100. Choose odd one from following curtains, bed sheet, table cover, shirt

- A. Curtains
- B. Bed sheet
- C. Shirt
- D. Cover

101. Identify use of following machine pneumatic compression device used in :-

- A. DVT
- B. Pulmonary Embolism
- C. Varicose vein
- D. Leg pain

102. Identify airway used in emergency in following image

- A. Oropharyngeal airway
- B. Nasopharyngeal airway
- C. Nasogastric tube
- D. None

103. 0.45% NS is?

- A. Hypotonic solution
- B. Isotonic solution
- C. Hypertonic solution
- D. Colloid

104. The below shown instrument is used in which surgery?

- A. Thyroidectomy
- B. Abdominal surgery
- C. Thoracotomy
- D. Cesarean section

105. Identify following instrument used in hyperbilirubinemia monitoring based on image :-

- A. Phototherapy Irradiance meter
- B. Tempo meter
- C. Conversion meter
- D. None

106. Identify procedure done in image :-

- A. Nasogastric insertion
- B. NJ tube insertion
- C. ET insertion
- D. None

107. Identify catheter in following image :-

- A. Central venous line
- B. Intra-arterial line
- C. Peripherally inserted central line
- D. None of the above

108. Identify based on following image :-

- A. Inguinal hernia
- B. Thoracotomy
- C. Bleeding disorders
- D. None

109. Following questions based on following image. Others given here for reference only :-

- A. Green color denotes-Heart Rate
- B. Light blue color denotes-SPO2
- C. Yellow color denotes – Respiration
- D. White number denotes – NIBP

110. Identify following machine?


- A. Autoclave
- B. Ultrasonic instrument washer
- C. High risk medication cub-board
- D. None of the above

111. Find out problem in following image :-

- A. Inguinal hernia
- B. Incisional hernia
- C. Scrotal hernia
- D. None of the above

112. In the following picture, little finger under jaw is used because for ?

- A. To lift mandible angle
- B. It helps in c-spine stabilization
- C. To extend the jaw
- D. None



Monika's Nursing Academy Hamirpur

"Innovation is our Tradition"

113. Identify instrument used by nurse in following image :-

- A. Cheattle forceps
- B. Ovum forceps
- C. Sponge holder
- D. Kocher forceps

114. Identify procedure done on below image :-

- A. Blood culture
- B. Montoux test
- C. Arterial blood gas sampling
- D. None of the above

115. Identify position below :-

- A. Supine
- B. Prone
- C. Sims
- D. Dorsal recumbent

116. Identify instrument below :-

- A. Disposable tongue depressor
- B. Disposable SPO2 Probe
- C. Disposable thermometer
- D. None

117. Identify tube in image :-

- A. Oropharyngeal tube
- B. Endotracheal tube
- C. Tracheostomy tube
- D. Combi tube

118. Based on below image, which one is true option :-

- A. This is uncuffed tube appropriate for child
- B. This cuffed tube appropriate for child
- C. This uncuffed unappropriated for child
- D. This is cuffed and unappropriated for child

119. What is the procedure shown in video clip ?

- A. Endo tracheal intubation
- B. Oropharyngeal tube Intubation
- C. Combi-tube intubation
- D. Bronchoscopy

120. Identify marked area in image :-

- A. Femoral
- B. Radial
- C. Popliteal

D. Cubital fossa

121. As per below image, an imaginary plane that divides an imaginary plane that divides the body into superior and inferior parts is :-

- A. Coronal plane
- B. Frontal plane
- C. Sagittal plane
- D. Transverse plane

122. Identify Yellow vaporizer in following image :-

- A. Sevoflurane
- B. Isoflurane
- C. Enflurane
- D. None

123. Identify Cannula used in infants as per image :-

- A. 20 G
- B. 22 G
- C. 24 G
- D. 26 G

124. Identify cannula which used in patient with hemorrhagic shock shown on picture :-

- A. 14 G
- B. 16 G
- C. 18 G
- D. 20 G

125. Identify following sample collection tube used in ?

- A. Pap's smear
- B. Throat swab
- C. Culture
- D. None of the above

126. Identify following in image :-

- A. Jackson-Praat drain
- B. Wound drain
- C. Hemo-vac drain
- D. None of the above

127. Find out odd one of the following

- A. Microsoft
- B. Facebook
- C. Twitter
- D. Instagram

128. This type of dressing is known as :-



Monika's Nursing Academy Hamirpur

"Innovation is our Tradition"

- A. Foam dressing
- B. Sponge dressing
- C. Negative pressure dressing
- D. Positive pressure dressing

129. Pregnant woman is monitored by nurse, based on following image identify wave pattern is :-

- A. Fetal deceleration
- B. Re-assuring pattern
- C. Fetal tachycardia
- D. Fetal acceleration

130. Identify marked area in following image:-

- A. Thoracic
- B. Axillary
- C. Mid-axillary
- D. None of the above

131. Nurse advised to administer inj. Metronidazole a patient. She knows action of this is :-

- A. Analgesic
- B. Antipyretic
- C. Antibiotic
- D. Sedative

132. Nurse taking care of Chronic renal dysfunction patient. What diet she will advise for this patient ?

- A. Low sodium, low potassium, low protein diet
- B. High protein, low sodium, low potassium diet
- C. Low sodium, low potassium, high carbohydrate diet
- D. Low sodium, high potassium, low protein diet

133. Temporary cessation of breathing is :-

- A. Dyspnea
- B. Bradypnea
- C. Apnea
- D. Tachypnea

134. Nurse advised to give enema for patient with chronic liver disease. What position is used to administer enema?

- A. Prone
- B. Supine

- C. Sims
- D. Trendelenburg

135. Nurse notices redness and itching around intravenous cannula insertion site. What she should suspect :-

- A. Allergic to fluid
- B. Allergic to IV cannula
- C. Infiltration
- D. Phlebitis

136. Which of the following is the contraindication of gastric aspiration from NG tube?

- A. Hypertension
- B. Diabetes
- C. Esophageal varices
- D. Severe dehydration

137. Patient admitted with acute renal kidney injury, and nurse is advised to monitor strict urine output. She notices urine output is less than 100 ml for last 24 hours. It is called as :-

- A. Urine output is less
- B. Urine output is more
- C. Its normal
- D. None

138. A doctor has asked the nurse to insert Ryle's tube and has also mentioned "do not perform whoosh test to confirm the placement of the tube" What does whoosh test indicate?

- A. Aspiration of the gastric content
- B. Push air in the tube and auscultate
- C. Flush with water through NG
- D. Perform Chest X-Ray

139. Following medication in picture used in ?

- A. Local application
- B. Tooth extraction
- C. Cannula insertion
- D. Oral procedure

140. Priority action of patient Agitation management?

- A. Argue with patient and until he understands about situation



Monika's Nursing Academy Hamirpur

"Innovation is our Tradition"

- B. Don't consider about patient and leave patient in room
- C. Decrease the environment stimuli that causes agitation and place patient on safer place
- D. None of the above

141. Following all are blood transfusion complications from Except?

- A. TRALY
- B. Hemolytic reactions
- C. Transmission of infections
- D. Fluid deficit

142. A surgeon is going to give a skin incision on patient which of the following is to be done :-

- A. Sign in
- B. Sign out
- C. Time out
- D. Time in

143. Calculate pulse pressure from below image of cardiac monitor :-

- A. 35 mm Hg
- B. 45 mm Hg
- C. 55 mm Hg
- D. 40 mm Hg

144. A patient has tried to commit suicide with drug overdose. Which of the situation depicts that the patient has risk of suicide?

- A. Wrote a note
- B. Informed a relative
- C. Impulsive attempt
- D. Alcohol intake before committing suicide

145. Patient admitted in the ward had 3 episode of vomiting. Which of the following drug should not be given?

- A. Fentanyl
- B. Promethazine
- C. Tramadol
- D. Ondansetron

146. The below shown picture is bedsore present in bedridden patient. Which grade bedsore is present?

- A. Stage 1
- B. Stage 2

- C. Stage 3
- D. Stage 4

147. In mental health act 2017, experienced psychiatric nurse posted at which hospital ?

- A. Central or state Mental health authority (MHA)
- B. Tertiary centers
- C. Secondary centers
- D. None

148. Social skill training for schizophrenia patient is done for which symptoms?

- A. Positive sign
- B. Negative Sign
- C. Hallucination
- D. Delusion

149. Following are use of the central line catheter except?

- A. CVP monitor
- B. Administer medication
- C. Left ventricular function
- D. TPN administration

150. Symptom of acute blood loss are :-

- A. Tachycardia, hypertension
- B. Bradycardia, hypertension
- C. Tachycardia, Hypotension
- D. Bradycardia Hypotension

151. A patient reports calcium loss. What is the nursing intervention?


- A. Reposition the patient every 2 hourly
- B. Give supplemental feeds in between meals
- C. Encourage to walk
- D. Give dairy products

152. Which medicine we used to give after immediate delivery of baby?

- A. Oxytocin 10 units IM
- B. Oxytocin 20 Units IM
- C. Methergine 0.2 mg IM
- D. None of these

153. Which of following is not involved in chest physiotherapy?

- A. Nebulization
- B. Percussion
- C. Coughing



Monika's Nursing Academy Hamirpur

"Innovation is our Tradition"

D. Vibration

154. Movement towards midline is called

as :-

A. Anterior central

B. Posterior

C. Midline

D. Posterior lateral

155. Which of the following equipment's used in Neonatal Resuscitation program ?

A. A only

B. A and B only

C. A and c only

D. All of the above

156. OT Nurse opening sterile drum and taking gauze with cheatele forceps, then transfer it to bare hand and keeps in sterile area, which one is correct among this?

A. Sister is not doing wrong

B. She should ask the scrub nurse to open the drum

C. Sister is not wearing gloves

D. Sister is not doing in right thing

157. Match the following :-

A. A-4,B-3,C-2,D-1

B. A-4,B-2,C-3,D-1

C. A-4,B-1,C-2,D-3

D. A-3,B-4,C-2,D-1

158. Match the following :-

A. A-3,B-1,C-2

B. A-2,B-3,C-3

C. A-3,B-2,C—1

D. A-1,B-2,C-3

